

# THE VILLAGE INTERNATIONAL SCHOOL

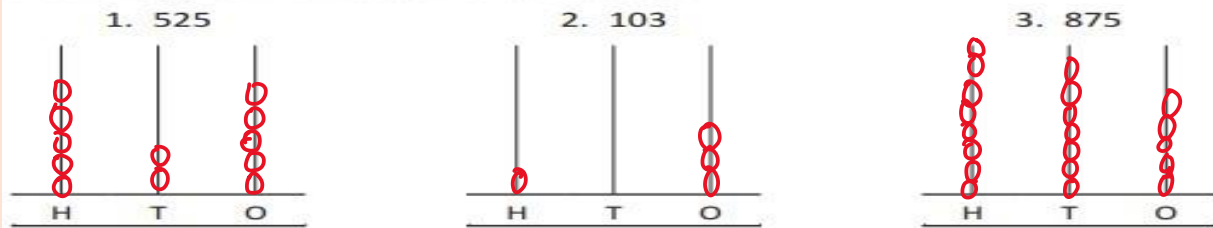
## Question Bank

Subject: Mathematics

Chapter 2: Numbers up to 1000

1.

Show the given numbers on the abacuses.



2. 100 numbers after 789 is .....

ANS: 889

3. 10 numbers after 890 is .....

ANS: 900

4. 100 numbers after 500 is .....

ANS: 600

5. 10 numbers after 435 is .....

ANS: 445

6. Complete the pattern:

a) 330, 340, ....., ....., .....

ANS: 350, 360, 370

b) 452, 552, ....., ....., .....

ANS: 652, 752, 852

c) 879, 889, ....., ....., .....

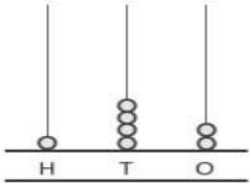
ANS: 899, 909, 919

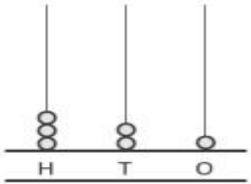
d) 577, 677, ....., ....., .....

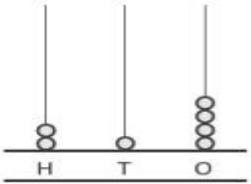
ANS: 777, 877, 977

7.

Write the numbers shown on the abacuses and their number names.

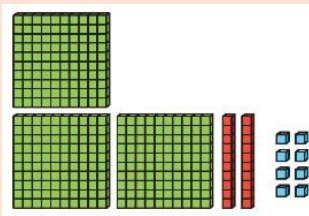
1.   
\_\_\_\_\_

2.   
\_\_\_\_\_

3.   
\_\_\_\_\_

ANS: 142, 321, 214

8. Write the number:



ANS: 328

9. Write the place value of 3 in 432?

ANS: 30

10. Write the face value of 7 in 187?

ANS: 7

11. Write the face value of 0 in 509?

ANS: 0

12. Write  $<$ ,  $>$  or  $=$  in the blanks:

a) 25 ..... 251    ANS:  $<$

b) 632 ..... 362    ANS:  $>$

c) 975 ..... 975 ANS: =

d) 799 ..... 800 ANS: <

13. Form the greatest and the smallest 3-digit numbers using the digits 9, 1, 3

ANS: Greatest number = 931

Smallest number = 139

14. Arrangement of numbers from smallest to the greatest is called

ANS: Ascending order

15. Arrangement of numbers from greatest to the smallest is called

ANS: Descending order

16. Arrange the numbers in ascending order:

394 , 400 , 716 , 187

ANS: 187, 394, 400, 716

17. Arrange the numbers in descending order

455 , 71, 179 , 413

ANS: 455, 413, 179, 71